


Name _____


Date _____



What time will it be in 6 hours and 35 minutes? _____

What time was it 5 hours and 30 minutes ago? _____


How much time will pass between now and 11:25? _____



What time will it be in 2 hours and 55 minutes? _____

What time was it 6 hours and 20 minutes ago? _____


How much time will pass between now and 3:40? _____



What time will it be in 4 hours and 40 minutes? _____

What time was it 2 hours and 45 minutes ago? _____

How much time will pass between now and 6:30? _____




What time will it be in 5 hours and 25 minutes? _____

What time was it 1 hour and 55 minutes ago? _____

How much time will pass between now and 4:20? _____

Answer Key



What time will it be in 6 hours and 35 minutes?


3:45

What time was it 5 hours and 30 minutes ago?

3:40

How much time will pass between now and 11:25?

2h 15m



What time will it be in 2 hours and 55 minutes?


1:25

What time was it 6 hours and 20 minutes ago?

4:10

How much time will pass between now and 3:40?

5h 10m



What time will it be in 4 hours and 40 minutes?


9:45

What time was it 2 hours and 45 minutes ago?

2:20

How much time will pass between now and 6:30?

1h 25m



What time will it be in 5 hours and 25 minutes?

6:40

What time was it 1 hour and 55 minutes ago?

11:20

How much time will pass between now and 4:20?

3h 5m